




Worksheet # C35: Predicting Products of Chemical Reactions (pgs 256-264)


A) For each of the following **synthesis** reactions, complete and balance the chemical equation.




B) For each of these **decomposition** reactions, complete and balance the chemical equation.



C) For each of these **single displacement** reactions, complete and balance the chemical equation.



D) For each of these **double displacement** reactions, complete and balance the chemical equation



E) For each of these **combustion** reactions, complete and balance the chemical equation.

