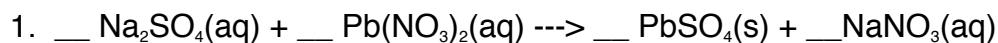
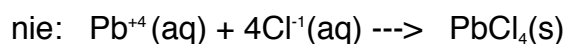
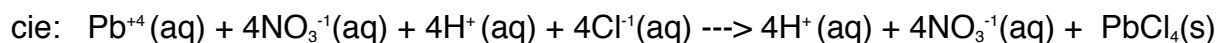
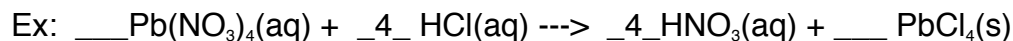


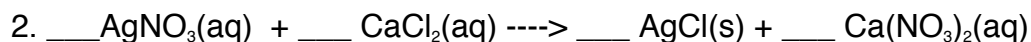
Worksheet # C40: Dissociation and The Three Kinds of Equations

Balance each of the following molecular equations. Then write out the complete ionic equation (cie) and the net ionic equation (nie) for each.




cie: _____

nie: _____



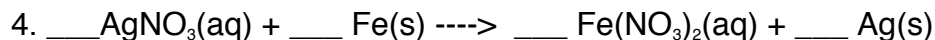
cie: _____

nie: _____



cie: _____

nie: _____



cie: _____

nie: _____

The goal will be to be able to look at an equation and just write out the net ionic equation, but that takes a little practice.

Are these making any sense to you yet? _____